

Name : _____

Score : _____

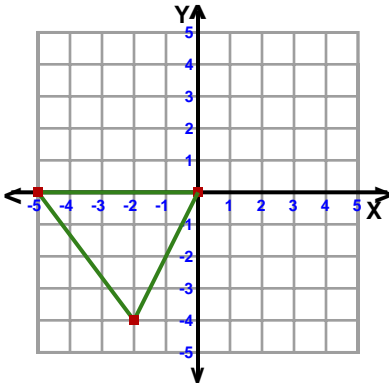
Teacher : _____

Date : _____

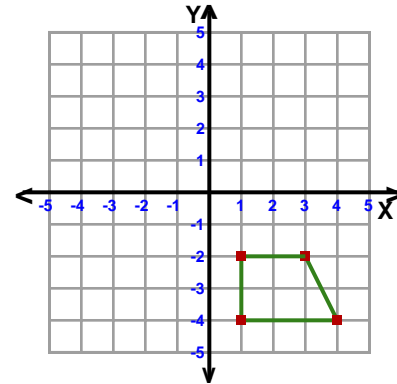
Transformations

ccw = counterclockwise

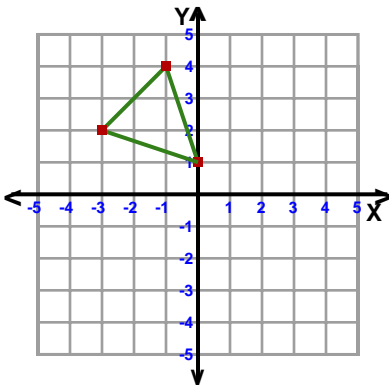
- 1) Reflection: Across Line $y = x$



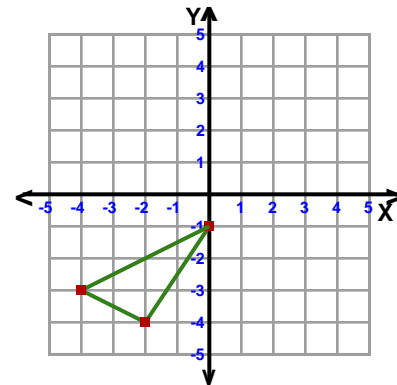
- 2) Translation: 5 left and 4 up



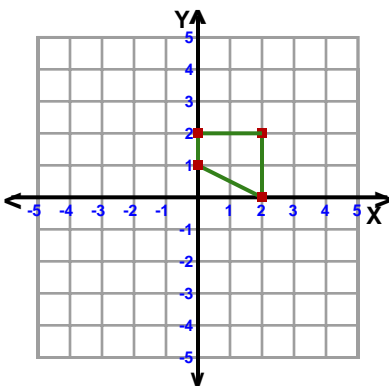
- 3) Translation: 4 right and 3 down



- 4) Reflection: Across the line $x = -1$



- 5) Rotation: 180° about the origin



- 6) Rotation: 180° about the origin

